

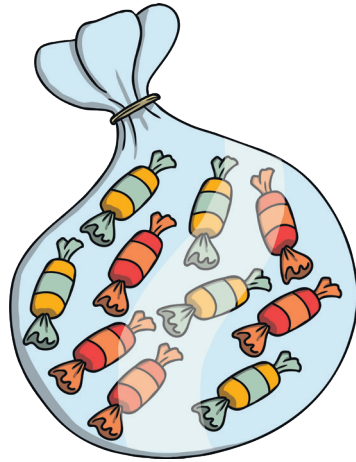
Multiples of 2 5 and 10 Word Problems

Multiples of 10

There are 10 sweets in a packet.

I have bought 17 packets.

How many sweets do I have?



Multiples of 2 5 and 10 Word Problems

Multiples of 2

There are 12 sausages in one packet.

How many sausages are in two packets?



Multiples of 2 5 and 10 Word Problems

Multiples of 5

Football stickers are sold in packets of five. I want to buy one sticker for each child in the class.

If there are 30 children, how many packets do I need to buy?



Multiples of 2 5 and 10 Word Problems

Multiples of 2

Miss Casha has 34 pairs of shoes. How many shoes are there altogether?




Multiples of 2 5 and 10 Word Problems

Multiples of 10

Owen had a birthday party and invited 10 friends.

He wants to put two blowers in each party bag. How many whistles does he need?




Multiples of 2 5 and 10 Word Problems

Multiples of 2

There are 30 children in 3C. Mrs Roberts has to mark each child's numeracy and science books tonight!

How many books does she have to mark?



Multiples of 2 5 and 10 Word Problems

Multiples of 10

Chris spends 70p on 10 party bags.

How much does each bag cost?




Multiples of 2 5 and 10 Word Problems

Multiples of 2

In year 2, there are 70 boys in two classes.


How many would be in each year 2 class?



Multiples of 2 5 and 10 Word Problems

Multiples of 5

Mr Blavoet wants to separate his class into groups of 5. There are 30 children in his class. How many groups would he need?



Multiples of 2 5 and 10 Word Problems

Multiples of 2

Miss Fraser has 34 children in her class. She wants enough laptops for children to work in pairs. How many laptops does she need?



Multiples of 2 5 and 10 Word Problems

Multiples of 5

A glove has space for five fingers. How many finger spaces are in 14 gloves?



Multiples of 2 5 and 10 Word Problems

Multiples of 5

A car seats 5 passengers. How many cars would you need to take 25 people to the shops?

